
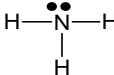

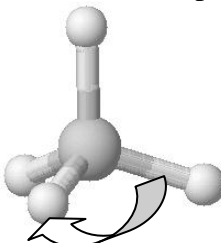
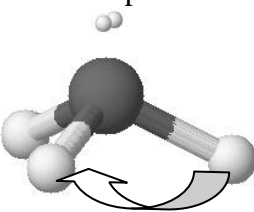
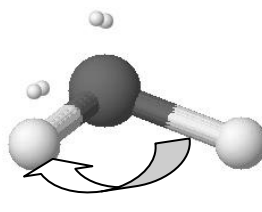


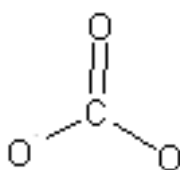
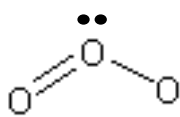
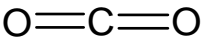
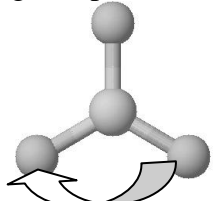
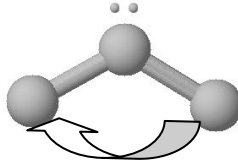
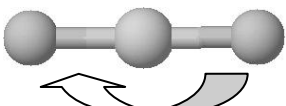
Molecular Geometry

Name: _____

Date: _____

Information: Shapes of Molecules

Name	Methane, CH ₄	Ammonia, NH ₃	Water, H ₂ O
Lewis Structure			
3-D Shape	Tetrahedral shape  Bond angle = 109.5°	Trigonal pyramidal shape  Bond angle = 106.5°	Bent shape  Bond angle = 104.5°
Total # of electron regions	4	4	4
# of Bonding electron regions	4	3	2
# of lone pair electron regions	0	1	2

Name	Carbonate, CO ₃ ²⁻	Ozone, O ₃	Carbon dioxide, CO ₂
Lewis Structure			
3-D Shape	Trigonal planar shape  Bond angle = 120°	Bent shape  Bond angle = 118.6°	Linear shape  Bond angle = 180°
Total # of electron regions	3	3	2
# of bonding electron regions	3	2	2
# of lone pair electron regions	0	1	0

Critical Thinking Questions

1. What is an electron region?
2. What is a "lone pair electron region"?
3. What is a "bonding electron region"?
4. *The number of electron regions determines the bond angle.* With this in mind, complete the following sentence: "Any molecule that has bond angles of approximately 105-109° will have _____ total electron regions; any molecule that has bond angles of approximately 120°
how many?
will have _____ total electron regions; and any molecule with bond angles of
how many?
approximately 180° will have _____ total electron regions."
how many?
5. The molecules in the above table are representative of many other molecules. Therefore, it can be said that any molecule with 3 bonding electron regions and 1 lone pair electron region has a geometrical shape called "trigonal pyramidal". Draw Lewis dot structures for the following structures and name the geometrical shape.

A) NO₃⁻ B) NF₃ C) CF₄
6. A certain molecule has a bent shape with bond angles of about 119°. Is the molecule SO₂ or SH₂? Explain. (Hint: draw the Lewis structures for SO₂ and SH₂.)

Information: VSEPR

The geometry of molecules is based on a theory called "Valence Shell Electron Pair Repulsion" (VSEPR) theory. The word "repulsion" is the key word because this theory states that all the electron pairs repel each other and so they want to get as far away from each other as possible. The atoms in a tetrahedral molecule are as far apart as geometrically possible at bond angles of 109.5°. There is no way that the atoms can get farther apart.

Critical Thinking Questions

7. In the tables on the first page, there are 3 molecules that have a total of 4 electron regions. The bond angles are slightly different because of lone pair electrons. What takes up more room--a lone pair of electrons or a bonding pair of electrons? Offer proof from the table above.

8. If you know how many bonding regions and lone pair regions surround an atom you can predict the bond angles around the atom, even in complex situations. Examine the following "big" molecules. By each arrow that points to an atom, write the bond angle for that atom; you should write 109.5° , 120° , or 180° to represent the *approximate* bond angle. One of them is done for you.

